

Big Maths Beat That!: Teacher Notes

CLIC Challenge 3			
	Step Location in the CLIC framework		Title of Step
	Progress Drive	Step No.	
Q1	Counting: Saying Numbers	2	I can count to 20
Q2	Early Years: Counting, Reading Numbers: 11 to 20	3	14, 15
Q3	Counting: Reading Numbers	2	I can read the numbers 11 - 20
Q4	Counting: Actual Counting	6	I can count 20 objects
Q5	Early Years: Counting, Actual Counting: 1 to 20 & From a Pile	5	10 objects from a pile
Q6	Early Years: Counting, Saying Numbers: Counting Backwards	2	10... 0
Q7	Counting: Counting On	5	I can Count On & Count Back 5
Q8	Counting: Counting Multiples	1	I can count in 10s
Q9	Calc: Addition	5	I can add numbers of objects to 10
Q10	Calculation: Subtraction	5	I can take away numbers of objects to 10




Name:

Class:

Date:

1 "1, 2, 3, 4, 5.....20" T

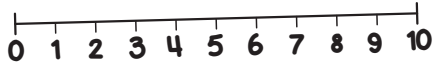
2 11 13 15 T
3 17 20 18 T

4  How Many? T


5 I can count out up to 10 objects from a pile T

6 "10, 9, 8, 7, 6, 5, 4, 3, 2, 1, Zero" T

7 What is 3 more than 4? T



8 "10, 20, 30, 40, 50, 60, 70 80, 90, 100" T

9  T

10  Take away 4, how many are left? T



Note: Multiple copies of this CLIC Challenge are not provided since all scores arise through teacher assessment.




Name:

Class:


Date:

1 "1, 2, 3, 4, 5.....20" T

2 11 17 T
13 15 20 18 T



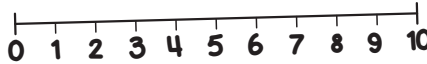
4 How Many? T
14



5 I can count out up to 10 objects from a pile T

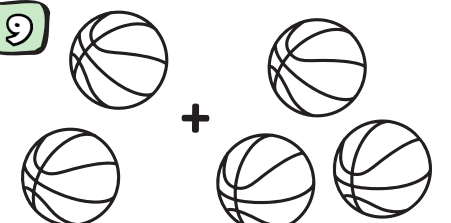
6 "10, 9, 8, 7, 6, 5, 4, 3, 2, 1, Zero" T

7 What is 3 more than 4? T
7



8 "10, 20, 30, 40, 50, 60, 70 80, 90, 100" T

9 T
5



10 Take away 4, how many are left? T
2



MY LAST SCORE?!

HAVE I BEAT THAT?!